

EVEN AND ODD


KS1 – 2002 Paper

1.

14 Draw a ring around each **even** number.

35 28 29

11 16



KS1 – 2004 Paper 1

2.

16 Draw a cross (x) on **three** numbers that are **not** even.

15

6

7

9

4

18



KS1 – 2009 Paper 1

3.

8

Here are some numbers.

15

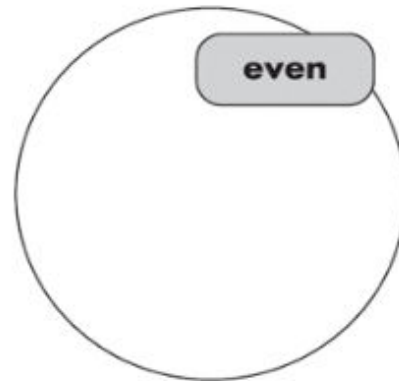
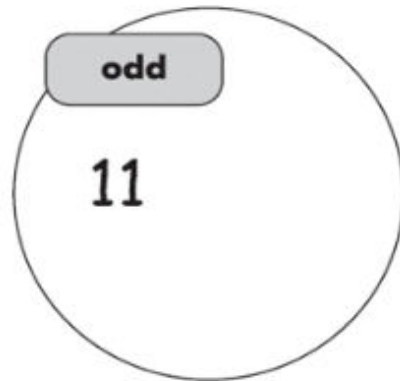
18

14



Write these numbers in the correct set.

One is done for you.




KS1 – 2016 Paper - Reasoning


4.

12 Two of the numbers are in the **wrong** bag.

Draw a cross (X) on each of them.



even numbers



odd numbers



5.

9 Circle the **two** numbers that are even.

73

58

64

45



1 mark